



SWARNPRASTHA PUBLIC SCHOOL
HOLIDAY HOMEWORK
SESSION: 2025-26
CLASS 5

***‘SUMMER VACATION – IT’S THE BEGINNING OF DISCOVERING
BEYOND CLASSROOM!’***

Dear Young Explorers!

Your most awaited summer vacation is here- a time to relax, reflect and react. It can be a great time for children to learn, explore and have a blast. But while you enjoy every sunny moment, how about sprinkling a little bit of learning into it.

We, at Swarnprastha Public School ensure that the holiday homework is crafted in such a manner that the students not only develop essential futuristic skills but also develop into global citizens. Each subject’s holiday homework is a reflection of Sustainable Development Goals, Ethos and Etiquette which will allow them to become a global responsible student. Also, it will give you an incredible opportunity to create, learn and grow in exciting new ways. Children will be able to do these assignments independently. However, parents can fortify the relationship between themselves and their children by providing direction, support and aid whenever required. It can also contribute to developing a constructive learning environment at home during summer break.

You can also download the Holiday Homework from the school website (www.swarnprastha.com) or visit MCB for your convenience. In case of any clarification, you may contact the teacher concerned as it shall be a part of the Internal Assessment.

General Instructions:

- Activities / Project work to be done as per the instructions.
(Use A3/A4 size sheets for activities)
- Do the theoretical questions and case study in your respective subject notebooks.
- Children may opt for any one activity / project as per their choice for each subject.
- Holiday homework will be assessed as a part of Internal Assessment.
- Make sure you complete the assigned Holiday Homework and submit it on time.
- Neatness and presentation are common parameters for most of the activities assigned. Please maintain the quality of work done.
- Make sure that the syllabus done in the months of April and May must be revised thoroughly.
- Holiday Homework should be submitted by 3rd July 2025 (Thursday). It must be labelled properly with the name, class and roll number of the child.
- Watch informative channels like Discovery kids, Animal Planet, YouTube Kids etc. to enhance your knowledge.
- Originality of the work will be appreciated.
- Encourage your ward to converse in English as a regular practice during holidays to enhance the 3 C's of communication (confidence, clarity & courteousness).

Happy Holidays!!

Regards

Team Swarnprastha

SUBJECT – ENGLISH

The English holiday homework is structured to help students apply their **LSRW (Listening, Speaking, Reading and Writing)** skills creatively, building confidence and fluency in the language. Through a mix of interactive, reflective and imaginative exercises, students will enhance their vocabulary, comprehension and expression. This holistic approach encourages independent learning and strengthens communication skills in a fun and enjoyable manner.

Listening

Listen to the audio/visual carefully and then attempt the given questions.

Link: <https://youtu.be/9ofL45Mrzj0?si=CPCDcScmnJwH5CT->

A. Answer the following questions on the basis of your listening.

Q1. Arrange the events in the order of the sequence given in the story.

- a) Monu's friends come to his house to invite him to play.
- b) As soon as Mohit comes home in the evening, he sees the test scores of both sons.
- c) Sonu learns everything in Hindi and makes his English project as well.

Q2. Who said these words and to whom?

- a) 'First, take a bath. Then I will give you breakfast.'
- b) 'Son, I have high expectations from you.'

Q3. Correct the given statements.

- a) 'Both of them were twins and their faces were exactly the same.'
- b) Monu wakes up early in the morning on Sunday to study.

Q4. Complete the statement.

- a) We can make our own _____.
- b) The person who does not make proper use of _____ can never progress in life.

Q5. Describe the characters of Sonu and Monu in one word each.

Q6. What lesson did you learn from this story?

Speaking

Speaking English should be done voluntarily and regularly to enhance your communication skills. Some popular You Tube Channels are being mentioned below to assist you in upskilling your communication skills during summer break.

1. Learn English Kids by British Council
2. Learning Time with Timmy
3. Learn English- Let's Talk

Reading

Comprehension Passage -1

Q1. Read the passage carefully and answer the following questions.

Every day, people walk, ride bicycles or travel in vehicles to get to school, work or other places. But roads can be dangerous if we don't follow the rules. That's why road safety is so important! Pedestrians (people who walk) should always use the sidewalk. If there is no sidewalk, they should walk facing the traffic, so they can see the vehicles coming. When crossing the road, it's best to use a zebra crossing or a pedestrian signal. Always remember to look left, then right, then left again before crossing.

If you're riding a bicycle, wear a helmet to protect your head. Ride on the correct side of the road and follow traffic signals. Never use your phone or wear headphones while riding because you need to stay alert. When traveling in a car, always wear your seatbelt. Children should sit in the back seat and use a booster seat if needed. The driver should never use a phone or drive too fast. Road safety is not just for drivers. It's for everyone. When we follow the rules, we help keep ourselves and others safe.

a. Why is road safety important?

- i. To get to places faster
- ii. To help people stay safe on the road
- iii. To follow fashion trends

b. What should pedestrians do before crossing the street?

- i. Run across quickly
- ii. Look right, then left
- iii. Look left, right, and left again

c. Replace the underlined words in the given sentences with a correct antonym. (From the Passage)

- i. Always remember to look left, then right.
- ii. The driver should never use a phone or drive too fast.

d. Match the given words with their correct meaning.

- | | |
|--------------|--|
| i. seatbelt | something that is used to carry people or things |
| ii. vehicles | a safety device in a vehicle |

e. Write a suitable title that summarises the main theme of the passage.

f. What should you wear when riding a bicycle?

Comprehension Passage 2

Q2. Read the passage carefully and answer the following questions.

Winter is a cold season. The weather gets chilly and snow may cover the ground. During winter, many animals find ways to survive the cold. Some animals hibernate, some migrate and others grow thick fur to stay warm. Hibernation is when animals go into a deep sleep. Bears, bats and some frogs hibernate. While they sleep, their bodies use very little energy and they do not eat for months! Some birds and butterflies migrate, or travel, to warmer places. They return when the weather becomes warm again.

Other animals, like deer and foxes, do not leave or sleep. Instead, they grow thick fur to protect them from the cold. They also look for food, even when it is hard to find. Winter can be tough, but animals are smart. They have special ways to survive until spring comes again.

a. Match the given words with their correct meaning.

- | | |
|--------------|---|
| i. fur | to stay alive |
| ii. survive | to travel to another place |
| iii. migrate | hair that covers the bodies of some animals |

b. What are three ways animals survive in winter?

- i. Fly, run and jump
- ii. Hibernate, migrate and grow fur
- iii. Sleep, eat and swim

c. What does it mean to hibernate?

- i. To eat a lot
- ii. To play in the snow
- iii. To sleep for a long time during winter

d. Replace the underlined words in the given sentences with a correct synonym.

- i. They return when the weather becomes warm again.
- ii. Winter can be tough but animals are smart

e. Why do animals migrate?

f. Write a suitable title that summarises the main theme of the passage.

Writing

Q1. Describe the scene in the given picture on the basis of pointers provided below in 60 -70 words.



Pointers:

- Describe the airport's appearance.
- Write about the people present at the scene.
- Mention the necessary formalities which are conducted at the airport.
- Share your personal experience at the airport

Q2. Children's all time favourite author Ruskin Bond recently celebrated his 91st birthday on 19 May, 2025. He is a renowned author who has written exemplary books like **The Blue Umbrella**, **The Woman on Platform No.8**, **The Cherry Tree** and **Cricket for the Crocodile**. Dive into the magical world of books and write a review in 70-80 words after reading any one of the books he has written.

Note:

1. Begin each task with the correct date and a clear heading (e.g., Holiday Homework – Comprehension Practice).
2. Revise vocabulary and phrases covered in class in the months of April and May. (Refer to Learning Layout)

विषय - हिंदी

प्रश्न 1- निम्नलिखित गद्यांश को पढ़कर दिए गए प्रश्नों के उत्तर लिखिए-

पोंगल दक्षिण भारत के तमिलनाडु राज्य में मनाया जाने वाला एक प्रमुख त्योहार है। यह फसल की कटाई के अवसर पर मनाया जाता है। पोंगल 14 जनवरी से प्रारंभ होकर 17 जनवरी तक बड़े हर्षोल्लास के साथ मनाया जाता है। पहले दिन इंद्रदेव की पूजा की जाती है; क्योंकि इंद्रदेव के प्रसन्न होने पर ही अच्छी वर्षा होती है और धरती हरी-भरी होती है। दूसरे दिन सभी लोग मिट्टी की हँडिया में दूध-चावल मिलाकर पकाते हैं और सूर्य भगवान को इसका भोग लगाते हैं। तीसरे दिन लोग अपनी गायों और भैंसों को सजाते और सँवारते हैं और इनके प्रति अपनी आस्था व्यक्त करते हैं; क्योंकि इन्हीं की मदद से कृषि का कार्य संपन्न होता है। अंतिम दिन सभी लोग रंग-बिरंगे और नए-नए कपड़े पहनकर घूमने के लिए बाहर जाते हैं। इस दिन सभी घरों में मिठाइयाँ और अच्छे-अच्छे पकवान बनते पहनकर घूमने के लिए बाहर जाते हैं। लोग एक-दूसरे के घर जाकर बधाइयाँ देते हैं। इस प्रकार पूरे तमिलनाडु में पोंगल का यह त्योहार पूरे हर्षोल्लास के साथ चार दिन तक मनाया जाता है।

(i) पोंगल भारत के किस प्रदेश में मनाया जाता है?

(क) तमिलनाडु में (ख) दक्षिण भारत में (ग) आंध्र प्रदेश में (घ) उत्तर प्रदेश में

(ii) पोंगल में दूसरे दिन किसकी पूजा की जाती है?

(क) गाय-भैंसों की (ख) इंद्रदेव की (ग) सूर्यदेव की (घ) अग्निदेव की

(iii) इंद्रदेव की आराधना क्यों की जाती है?

(क) इंद्रदेव वर्षा के स्वामी हैं और वर्षा से फसल अच्छी होती है।

(ख) इंद्रदेव सभी देवताओं के राजा हैं।

(ग) किसान इंद्रदेव से डरते हैं और उन्हें नाराज़ नहीं करना चाहते।

(घ) लोग एक-दूसरे के घर जाकर बधाइयाँ देते हैं।

(iv) पोंगल का त्योहार क्यों मनाया जाता है?

(v) यह त्योहार लोग किस प्रकार मानते हैं?

(vi) पोंगल में किसान किसके प्रति अपनी आस्था व्यक्त करते हैं और क्यों?

(vii) 'मिठाई' शब्द का बहुवचन शब्द है-

(क) मिठाईयाँ (ख) मिठाइयाँ (ग) मिठाइएँ (घ) मिठइयाँ

(viii) पोंगल से पहले वाले दिन यानि 13 जनवरी को कौन स त्योहार मनाया जाता है?

प्रश्न 2- निम्नलिखित गद्यांश को पढ़कर दिए गए प्रश्नों के उत्तर लिखिए-

रंग-बिरंगे फूल किसका मन नहीं मोह लेते अर्थात् फूल सभी को प्रिय होते हैं। जब कभी हम फूलों से भरे बगीचे के समीप से गुजर रहे होते हैं तो फूलों की सुगंध हमें अपनी ओर आकर्षित कर लेती है। फूलों को हम अन्य नामों से भी पुकारते हैं पुष्प, सुमन, कुसुम एवं प्रसून आदि। इसी प्रकार फूल कई तरह के होते हैं जैसे- गुलाब, बेला, चमेली गेंदा आदि। फूल हमारे जीवन में अपना विशेष स्थान रखते हैं-जन्मोत्सव हो अथवा विवाह, पूजा का अवसर हो या किसी के स्वागत की तैयारी, किसी त्योहार पर रंगोली बनानी हो या भगवान के लिए माला अथवा गहने, कोई शोक सभा हो तो भी हमें फूलों की आवश्यकता होती है। फूल एक बीमार व्यक्ति के चेहरे पर भी मुस्कान ला देता है। क्या आप जानते हैं कि हम लोग जिस सुगंधित इत्र का प्रयोग करते हैं वह भी फूलों से बनता है। गुलाब के फूलों का गुलकंद बनता है जो हमारे शरीर को ठंडक देता है। गुलाब के रस से गुलाब जल बनता है जो आँखों के लिए बड़ा लाभकारी है।

(i) फूलों के कोई अन्य दो नाम लिखिए।

(ii) फूलों का हमारी खुशियों में क्या योगदान होता है?

(iii) गुलाब के फूल से क्या-क्या बनता है?

(iv) इस गद्यांश को आप क्या नाम (शीर्षक) देना चाहेंगे और क्यों?

(v) बीमार व्यक्ति के लिए फूल किस प्रकार लाभकारी है?

(vi) 'आँख' शब्द का बहुवचन शब्द है-

(क) आंखों (ख) आँखे (ग) आँखों (घ) आँखें

(vii) आपको कौन सा फूल पसंद है और क्यों?

(viii) गुलकंद क्यों लाभकारी है?

(ix) इत्र किस काम आता है?

प्रश्न-3 कुछ प्रेरणात्मक कहानियाँ पढ़िए व उनमें से जो आपको सबसे अच्छी लगी उसका नाम लिखकर उसकी समीक्षा (review) भी लिखिए। आप उस कहानी से अपने जीवन में क्या बदलाव लाएँगे यह भी लिखिए। वर्णन कम से कम 100-120 शब्दों में हो।

SUBJECT – MATHEMATICS

L-1 LARGE NUMBERS- CASE STUDY

Q1. Ankita was given the digits 0, 7, 3, 5, 8 and 9. She was asked to form the smallest 7-digit number by repeating any one digit. Rama was given the same digits and was asked to form the greatest 7-digit number by repeating any one digit. Based on the given data, answer the following questions:

- What is the number formed by Ankita?
- What is the number formed by Rama?
- Write both the numbers in expanded form.
- What would be largest 9 digit number that can be formed using these digits (you can repeat the digits)

Q2. Lata and her grandfather went to a community library. In the library, there were 590099 books in Hindi and 409900 books in English. Lata took one Hindi story book from the library and lost it. Next day her grandfather donated 2 Hindi story books to the library.

Based on the above passage answer the following questions:

- How many total books were there in the library?
- Write the total number of books in words following International Number System.
- Write the expanded form for the number of Hindi Books.
- Write the successor and predecessor of the given numbers of Hindi and English books.
- When Lata's grandfather donated the books, how many Hindi books were there in the library?

Q3. India is a great place for manufacturing because it has low labour costs and excellent technical and engineering skills, which result in better quality products being made. The "Television World Factory" has been selling a large number of TV sets. The annual sales report of the factory shows remarkable figures. The first quarter sales were 7,483 TV sets the second quarter sales were 9,817 TV sets, the third quarter sales were 8,715 TV sets and the fourth quarter sales were 12,698 TV sets.

Based on the above information, answer the following questions:

- Arrange these quarterly sales figures in ascending order.
- In which quarter the sale was lowest?
- Find the sum of the place value of digits 2 and 6 in the number of TV sets sold in the fourth quarter.
- Round off the numbers (given in the question) to its nearest 10, 100 and 1000.

Q4. The first production of sugar from sugarcane took place in India. In the year 2022-23, Maharashtra was the top sugar producer state in India surpassing Uttar Pradesh. 138 lakh tonnes of sugar were produced by Maharashtra while the total sugar produced by Uttar Pradesh was 105 lakh tonnes. Rampur sugar factory produced 428015 bags of sugar, Govindpur sugar factory produced 413765 bags of sugar, Shahbad factory produced 276540 bags of sugar and Ramgarh factory produced 358750 bags of sugar. (1 ton = 1000 kg)

Based on the given data, answer the following questions:

- In the year 2022-23, which state was the second largest producer of sugar in India?
- How many zeroes will be in 1 lakh tonnes?
- Which factory produced more bags of sugar Rampur or Govindpur?
- How many bags of sugar did the four factories produce altogether?
- Arrange the bags of sugar produced by different factories in ascending order.

Q5. Given below are the land areas of the four largest countries of the world. study the list and answer the question below.

Country	Approximate area in Sq.km.
China	95,96,960
USA	96,29,091
Russia	1,70,75,200
Canada	99,84,670

- Which is the largest country in the above table?
- What is the difference between the largest and smallest country in the above table?
- What is the place value and face value of the digit 8 in the area of Canada?
- What is the area of the smallest country in the above table?

BRAIN TEASERS

- I am a four digit number. My first digit is three times the last digit, my second digit is twice the last digit and my third digit is the sum of the first and second digits. Which number am I?
- What number, when you multiply it by itself, gives the same answer as when you add it to itself?
- A farmer has 19 sheep on his land. One day, a big storm hits and seven sheep run away. How many sheep does the farmer have left?
- Your sock drawer only contains 18 white socks and 18 blue socks. How many times do you need to reach inside the drawer and take out a sock to guarantee a matching pair?
- A merchant can fit 10 large boxes or 8 small boxes into a container for shipping. In one shipment, he sent 96 boxes. If there were more large boxes than small boxes, how many full containers did he ship?
- Multiply this number with any other number and you will always get the same answer. What's the number?
- One grandmother, two mothers and two daughters went on a trip to the zoo together and bought one ticket each. How many tickets did they buy?
- This one-digit number is less than nine and more than two. It is also one more than the number of sides on a hexagon. What's the number?
- Freddie was given the task of painting number plates for 100 apartments. So, he had to paint all the numbers from 1 to 100. How many times did he have to paint the number 8?
- I am a three digit number. My first digit is three less than my second digit. My second digit is four times greater than my third digit. What number am I?
- Explore the shapes and patterns used in animal habitats, such as beehives and bird nests, or man made structures like bridges and skyscrapers.

Activity: Prepare any one by using waste material

OR

- Symmetry is pleasing to our eyes. Rangoli designs, mandalas and mehndi patterns demonstrate balance and harmony in nature. Why do you think symmetry is significant in Indian culture and art ?

Activity: Create your own Rangoli pattern inspired by nature's symmetry.

SUBJECT – SCIENCE

Solving problems isn't about having all the answers — it's about asking the **right questions** and choosing the **wise actions**.

The first step to staying safe is to **see the danger before it sees you**. When we learn to spot problems, we can stop accidents before they happen.

Read each problem carefully. Think about what is happening and what could go wrong. Then, write **4–5 sentences (on A4 ruled sheet)** explaining:

- What is unsafe in the situation?
 - What could happen?
 - What should you do instead?
1. Ravi is playing with a toy while sitting near a switchboard. He tries to stick his finger into the socket. What could happen? What would you tell Ravi?
 2. Your classmate suddenly gets a nosebleed during a lesson. Everyone around gets scared. What should you do?
 3. You are in your classroom when you suddenly see smoke and a small fire in the corner of the room. What should you do to stay safe and help others?
 4. During rain and lightning, Riya stands under a tall tree to stay dry.
Why might this be dangerous? What is a safer choice?
 5. Arjun is near the window using his phone while lightning flashes outside.
Is this safe? Why or why not? What should he do instead?
 6. While playing outside, you accidentally disturb a wasp nest. One of the wasps stings you on the arm. The area becomes red and swollen and it hurts. What steps should you take to treat the sting and prevent further complications?
 7. While playing in the school playground, your friend suddenly feels dizzy and then faints, collapsing onto the ground. You are nearby and notice this happening. What immediate steps should you take to help your friend?

SUBJECT – SOCIAL STUDIES

- A) Imagine you are about to embark on a weeklong journey to any of the physical features of India. It can be Northern mountains, Northern Plains, Thar Desert, Peninsular Plateau, Coastal Plain or Islands. You may write your experience of the recent past. (SDG 8- Decent work and Economic Growth)

Ponder on the following questions and write your views.

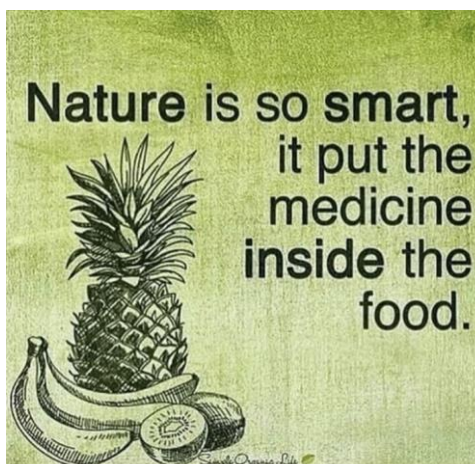
1. Name the place and state under which it falls.
2. Write the latitude and longitude of your destination.
3. What type of clothes would you choose to pack for your journey?
4. What type of food items would you pack?
5. What items do you believe are essential for surviving in the climate of the region?
6. Which natural resource would you use carefully in this region?
7. Find the names of festival, local food, language, crops, occupation, folk music, dance and famous sight- seeing spots of this region.
8. Add few pictures in the project if you had already been to.



OR

- B) Let's embark on a Nature's Heritage Trek to conserve our natural heritage and safeguard nature's magic healers. Explore plants like tulsi, aloe vera, moringa, neem, peepal, mint, banana, banyan tree etc. in your home or neighbourhood. (SDG- 15 Life on Land)

1. Collect few leaves, dry them and paste and label on the sheet.
2. Learn and write the names of each in your mother tongue or familiar language.
3. Write their few uses or ancient remedies. (3 to 4)
4. Choose any one of them for a drink or fireless cooking to make something healthy and delicious. Try a recipe and write your experience.
5. Plant any one of the plant at your home or nearby area. Add a name plate to it. Click a picture and paste on the sheet.
6. Water it when required and share your feelings with it. It listens!
7. Embrace your role as a guardian of nature's healing secrets!



PBL- Ch 6 (Elections) SDG- 16 Peace, Justice and Strong Institutions

Read Ch 6 from the book. Do its back exercises and worksheets given in the workbook. Watch the related videos. <https://youtu.be/0416yES4i6g?si=SfBRbd6NXtyM-lqi>


1. Imagine you are the leader of a political party. Give a suitable name, symbol and slogan for the party and explain your choice for the same.

Roll No (1 to 5)



2. Read chapter 6 from the text book and follow the globetrotter. Explore the things given in the columns on Pg. no 73, 75, 76, 77 & 80 and write your findings.

Roll No (6 to 10)




3. Make a campaign poster and write your manifesto too.

Roll No (11 to 15)



4. Prepare a ballot box and voting slips. Explain the process of voting and counting. Make your voter ID card.

Roll No (16 to 21)



5. Prepare a quiz comprising 14 to 15 questions based on the chapter.

Roll No (22 to 27)




Note:

1. Use A3 sheet to do your homework.
2. Be creative and write the answers on your own.

"Summer is the perfect time to reconnect with yourself, rejuvenate your spirit and recreate joyful memories that last a lifetime."



SPS
SWARNPRASTHA
PUBLIC SCHOOL
S O N E P A T

 **SPARSH GROUP INITIATIVE**

SWARNPRASTHA PUBLIC SCHOOL, SONEPAT
SECTOR-19, NEAR OMAXE CITY, NH-44, SONEPAT-131021, HARYANA
PH- +91-9812583803, +91-9729213802
info@swarnprastha.com/www.swarnprastha.com